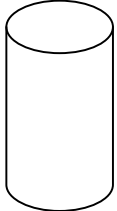


Name \_\_\_\_\_ Math HW

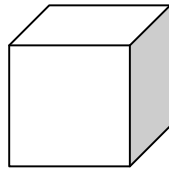
Monday:

Name the shapes.

1.



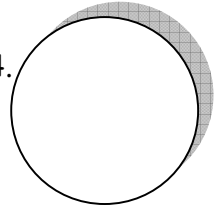
2.




3.



4.



5.



1. \_\_\_\_\_

2. \_\_\_\_\_

3. \_\_\_\_\_

4. \_\_\_\_\_

5. \_\_\_\_\_

---

TUESDAY:

Name and draw 5 plane shapes.

---

WEDNESDAY:

Solve the problems.

425

489

713

356

444

+119

+ 286

+179

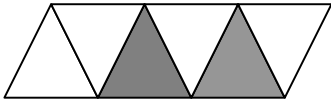
+444

+268

Name \_\_\_\_\_

**THURSDAY:**

Write the fraction for the shaded part. Circle the numerator.



\_\_\_\_\_



\_\_\_\_\_



\_\_\_\_\_



\_\_\_\_\_



\_\_\_\_\_



\_\_\_\_\_